

**Answers**

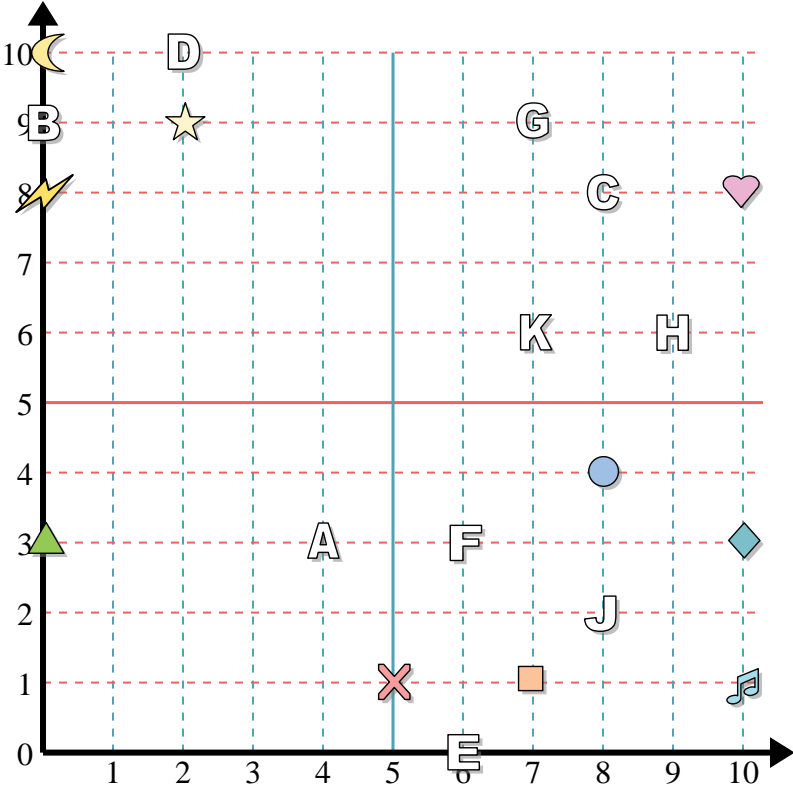
1. \_\_\_\_\_
2. \_\_\_\_\_
3. \_\_\_\_\_
4. \_\_\_\_\_
5. \_\_\_\_\_
6. \_\_\_\_\_
7. \_\_\_\_\_
8. \_\_\_\_\_
9. \_\_\_\_\_
10. \_\_\_\_\_
11. \_\_\_\_\_
12. \_\_\_\_\_
13. \_\_\_\_\_
14. \_\_\_\_\_
15. \_\_\_\_\_
16. \_\_\_\_\_
17. \_\_\_\_\_
18. \_\_\_\_\_
19. \_\_\_\_\_
20. \_\_\_\_\_

**Determine the coordinates of each figure.**

- |               |              |
|---------------|--------------|
| 1) music note | 2) circle    |
| 3) lightning  | 4) cross     |
| 5) moon       | 6) diamond   |
| 7) star       | 8) heart     |
| 9) square     | 10) triangle |

**Determine which letter is at each coordinate.**

- |             |            |
|-------------|------------|
| 11) (6, 0)  | 12) (7, 9) |
| 13) (2, 10) | 14) (9, 6) |
| 15) (8, 2)  | 16) (4, 3) |
| 17) (8, 8)  | 18) (0, 9) |
| 19) (7, 6)  | 20) (6, 3) |



Determine the coordinates of each figure.

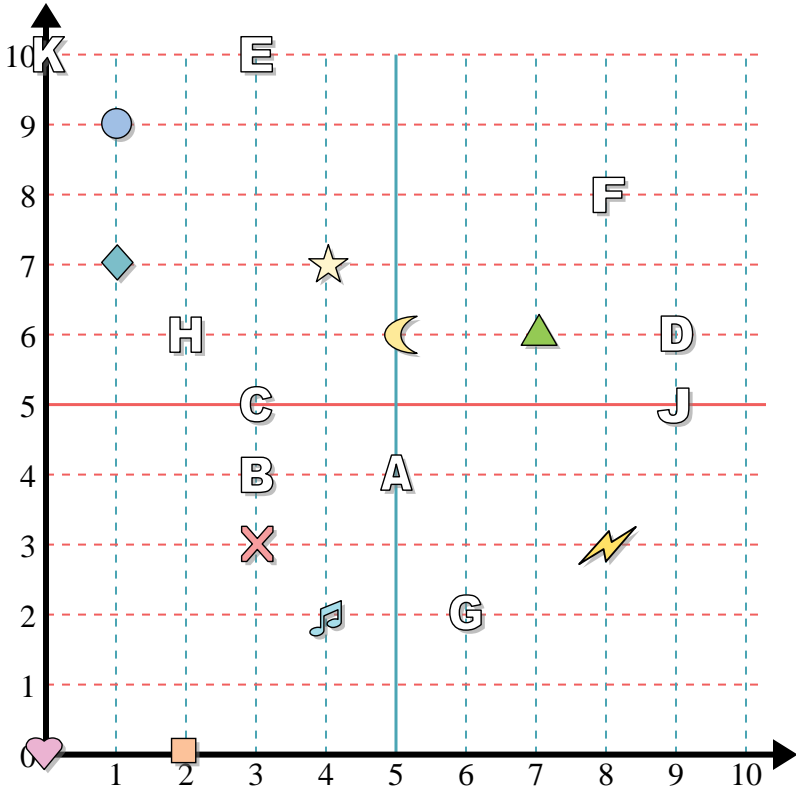
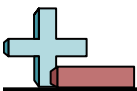
- |               |              |
|---------------|--------------|
| 1) music note | 2) circle    |
| 3) lightning  | 4) cross     |
| 5) moon       | 6) diamond   |
| 7) star       | 8) heart     |
| 9) square     | 10) triangle |

Determine which letter is at each coordinate.

- |             |            |
|-------------|------------|
| 11) (6, 0)  | 12) (7, 9) |
| 13) (2, 10) | 14) (9, 6) |
| 15) (8, 2)  | 16) (4, 3) |
| 17) (8, 8)  | 18) (0, 9) |
| 19) (7, 6)  | 20) (6, 3) |

**Answers**

1. (10, 1)
2. (8, 4)
3. (0, 8)
4. (5, 1)
5. (0, 10)
6. (10, 3)
7. (2, 9)
8. (10, 8)
9. (7, 1)
10. (0, 3)
11. E
12. G
13. D
14. H
15. J
16. A
17. C
18. B
19. K
20. F



**Answers**

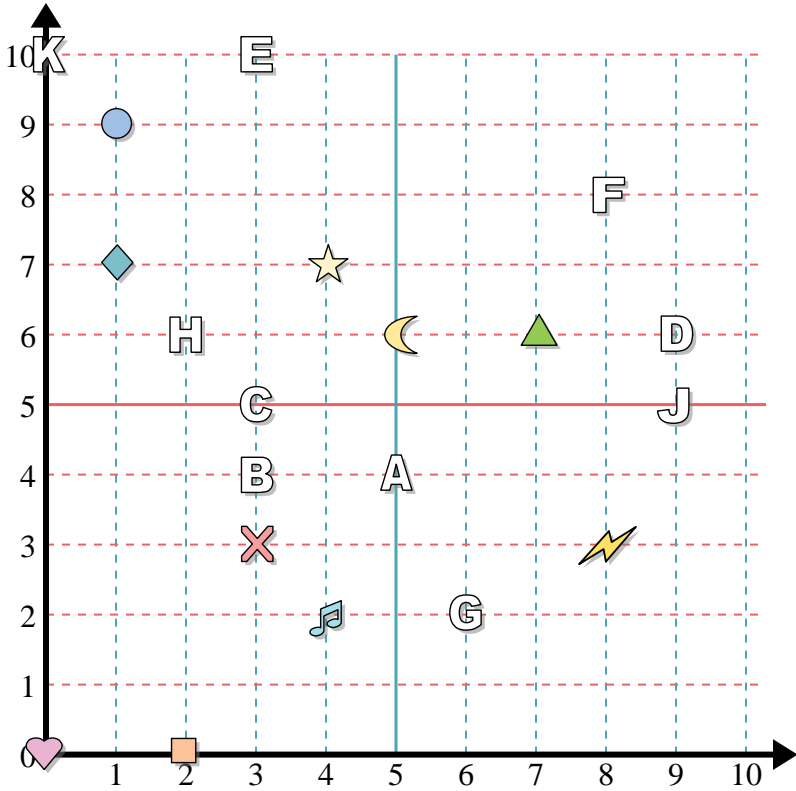
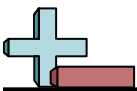
1. \_\_\_\_\_
2. \_\_\_\_\_
3. \_\_\_\_\_
4. \_\_\_\_\_
5. \_\_\_\_\_
6. \_\_\_\_\_
7. \_\_\_\_\_
8. \_\_\_\_\_
9. \_\_\_\_\_
10. \_\_\_\_\_
11. \_\_\_\_\_
12. \_\_\_\_\_
13. \_\_\_\_\_
14. \_\_\_\_\_
15. \_\_\_\_\_
16. \_\_\_\_\_
17. \_\_\_\_\_
18. \_\_\_\_\_
19. \_\_\_\_\_
20. \_\_\_\_\_

**Determine the coordinates of each figure.**

- |               |            |
|---------------|------------|
| 1) circle     | 2) diamond |
| 3) square     | 4) heart   |
| 5) music note | 6) cross   |
| 7) lightning  | 8) moon    |
| 9) triangle   | 10) star   |

**Determine which letter is at each coordinate.**

- |              |              |
|--------------|--------------|
| 11) (9 , 6)  | 12) (2 , 6)  |
| 13) (3 , 10) | 14) (3 , 5)  |
| 15) (3 , 4)  | 16) (0 , 10) |
| 17) (5 , 4)  | 18) (6 , 2)  |
| 19) (9 , 5)  | 20) (8 , 8)  |



Determine the coordinates of each figure.

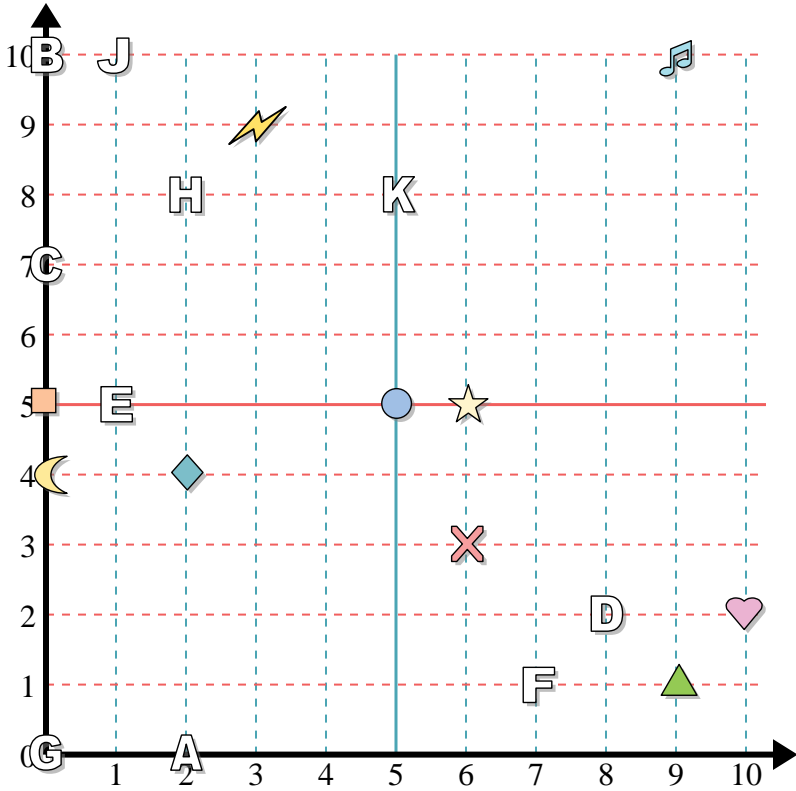
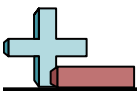
- 1) circle
- 2) diamond
- 3) square
- 4) heart
- 5) music note
- 6) cross
- 7) lightning
- 8) moon
- 9) triangle
- 10) star

Determine which letter is at each coordinate.

- 11) (9, 6)
- 12) (2, 6)
- 13) (3, 10)
- 14) (3, 5)
- 15) (3, 4)
- 16) (0, 10)
- 17) (5, 4)
- 18) (6, 2)
- 19) (9, 5)
- 20) (8, 8)

Answers

- 1. (1, 9)
- 2. (1, 7)
- 3. (2, 0)
- 4. (0, 0)
- 5. (4, 2)
- 6. (3, 3)
- 7. (8, 3)
- 8. (5, 6)
- 9. (7, 6)
- 10. (4, 7)
- 11. D
- 12. H
- 13. E
- 14. C
- 15. B
- 16. K
- 17. A
- 18. G
- 19. J
- 20. F



**Answers**

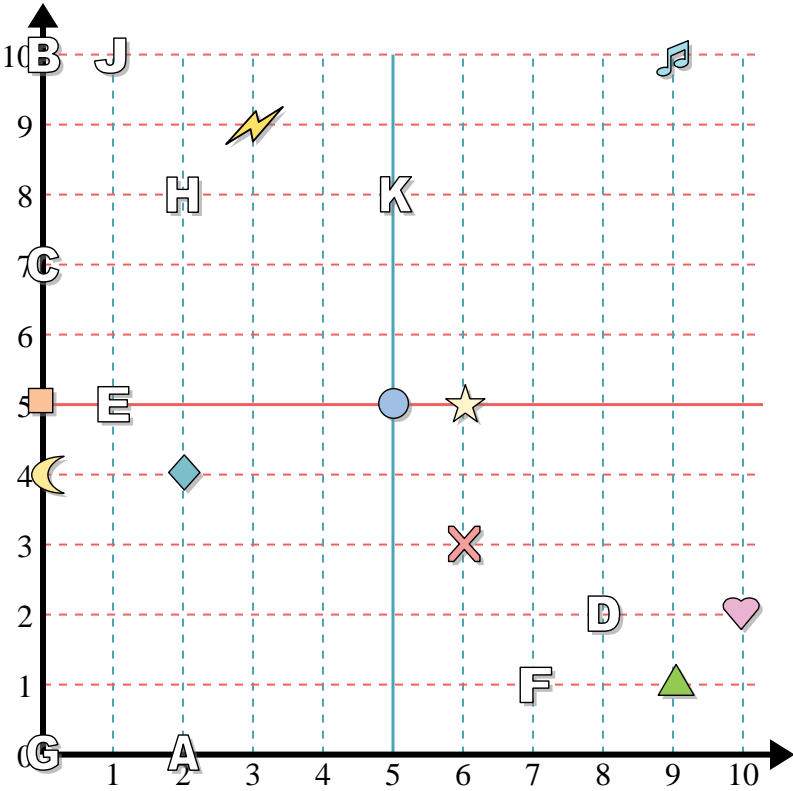
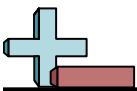
1. \_\_\_\_\_
2. \_\_\_\_\_
3. \_\_\_\_\_
4. \_\_\_\_\_
5. \_\_\_\_\_
6. \_\_\_\_\_
7. \_\_\_\_\_
8. \_\_\_\_\_
9. \_\_\_\_\_
10. \_\_\_\_\_
11. \_\_\_\_\_
12. \_\_\_\_\_
13. \_\_\_\_\_
14. \_\_\_\_\_
15. \_\_\_\_\_
16. \_\_\_\_\_
17. \_\_\_\_\_
18. \_\_\_\_\_
19. \_\_\_\_\_
20. \_\_\_\_\_

**Determine the coordinates of each figure.**

- |               |              |
|---------------|--------------|
| 1) triangle   | 2) moon      |
| 3) square     | 4) heart     |
| 5) star       | 6) circle    |
| 7) music note | 8) lightning |
| 9) cross      | 10) diamond  |

**Determine which letter is at each coordinate.**

- |              |             |
|--------------|-------------|
| 11) (1 , 10) | 12) (2 , 8) |
| 13) (0 , 7)  | 14) (5 , 8) |
| 15) (2 , 0)  | 16) (7 , 1) |
| 17) (0 , 0)  | 18) (8 , 2) |
| 19) (0 , 10) | 20) (1 , 5) |



Determine the coordinates of each figure.

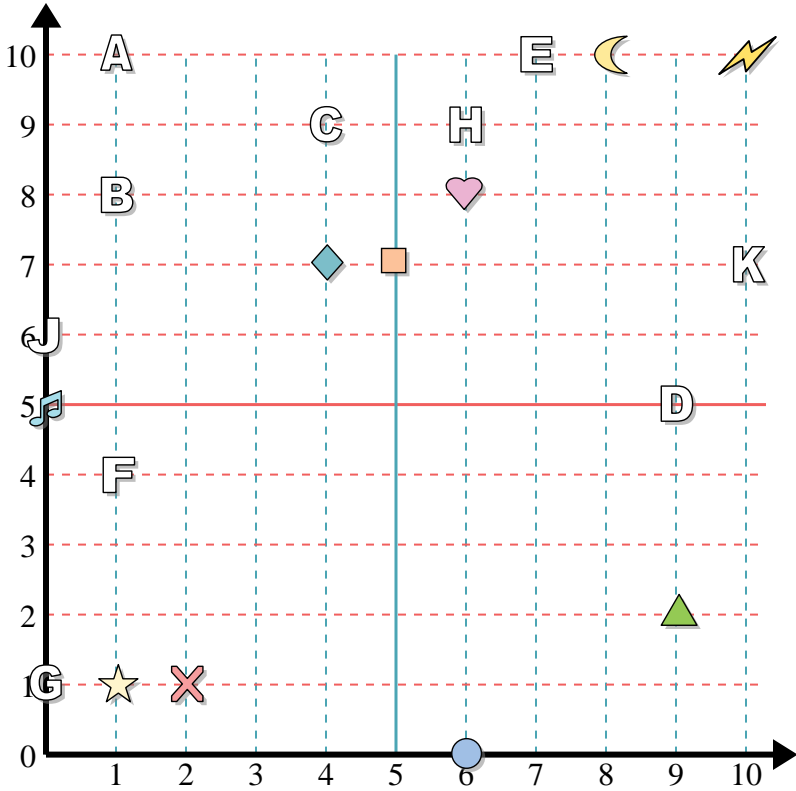
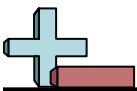
- 1) triangle
- 2) moon
- 3) square
- 4) heart
- 5) star
- 6) circle
- 7) music note
- 8) lightning
- 9) cross
- 10) diamond

Determine which letter is at each coordinate.

- 11) (1, 10)
- 12) (2, 8)
- 13) (0, 7)
- 14) (5, 8)
- 15) (2, 0)
- 16) (7, 1)
- 17) (0, 0)
- 18) (8, 2)
- 19) (0, 10)
- 20) (1, 5)

Answers

- 1. (9, 1)
- 2. (0, 4)
- 3. (0, 5)
- 4. (10, 2)
- 5. (6, 5)
- 6. (5, 5)
- 7. (9, 10)
- 8. (3, 9)
- 9. (6, 3)
- 10. (2, 4)
- 11. J
- 12. H
- 13. C
- 14. K
- 15. A
- 16. F
- 17. G
- 18. D
- 19. B
- 20. E



**Answers**

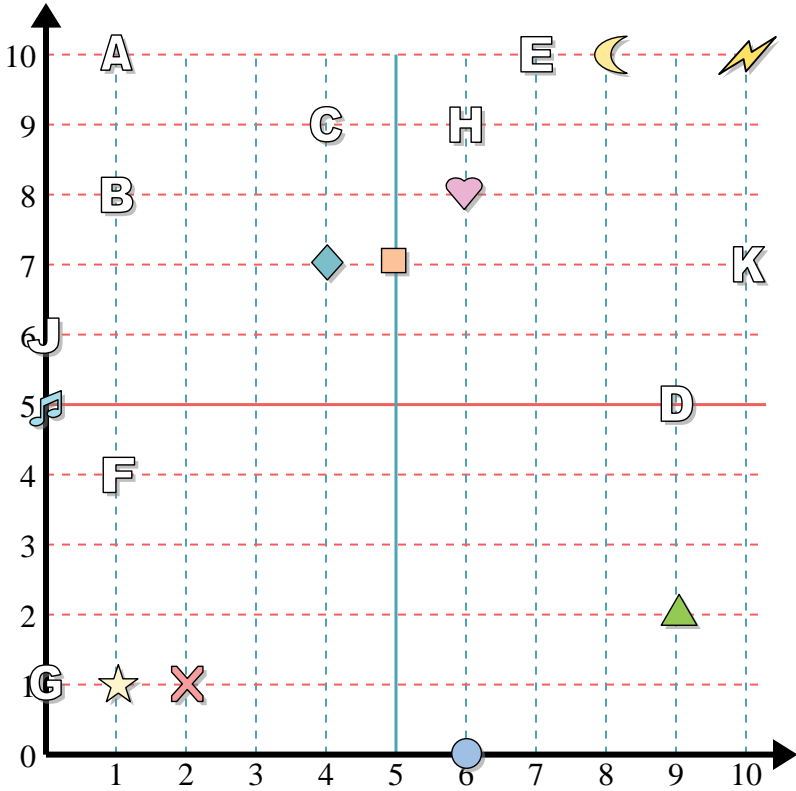
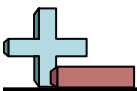
1. \_\_\_\_\_
2. \_\_\_\_\_
3. \_\_\_\_\_
4. \_\_\_\_\_
5. \_\_\_\_\_
6. \_\_\_\_\_
7. \_\_\_\_\_
8. \_\_\_\_\_
9. \_\_\_\_\_
10. \_\_\_\_\_
11. \_\_\_\_\_
12. \_\_\_\_\_
13. \_\_\_\_\_
14. \_\_\_\_\_
15. \_\_\_\_\_
16. \_\_\_\_\_
17. \_\_\_\_\_
18. \_\_\_\_\_
19. \_\_\_\_\_
20. \_\_\_\_\_

**Determine the coordinates of each figure.**

- |            |               |
|------------|---------------|
| 1) cross   | 2) music note |
| 3) star    | 4) circle     |
| 5) square  | 6) heart      |
| 7) diamond | 8) lightning  |
| 9) moon    | 10) triangle  |

**Determine which letter is at each coordinate.**

- |             |             |
|-------------|-------------|
| 11) (1, 10) | 12) (0, 6)  |
| 13) (6, 9)  | 14) (7, 10) |
| 15) (10, 7) | 16) (4, 9)  |
| 17) (1, 8)  | 18) (0, 1)  |
| 19) (1, 4)  | 20) (9, 5)  |



Determine the coordinates of each figure.

- 1) cross
- 2) music note
- 3) star
- 4) circle
- 5) square
- 6) heart
- 7) diamond
- 8) lightning
- 9) moon
- 10) triangle

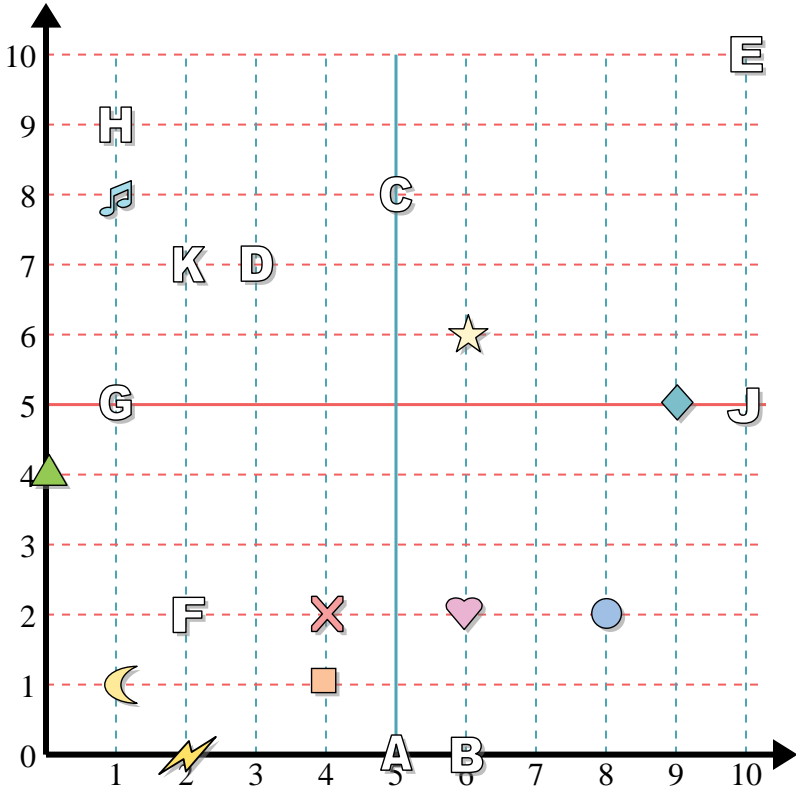
Determine which letter is at each coordinate.

- 11) (1, 10)
- 12) (0, 6)
- 13) (6, 9)
- 14) (7, 10)
- 15) (10, 7)
- 16) (4, 9)
- 17) (1, 8)
- 18) (0, 1)
- 19) (1, 4)
- 20) (9, 5)

Answers

- 1. (2, 1)
- 2. (0, 5)
- 3. (1, 1)
- 4. (6, 0)
- 5. (5, 7)
- 6. (6, 8)
- 7. (4, 7)
- 8. (10, 10)
- 9. (8, 10)
- 10. (9, 2)
- 11. A
- 12. J
- 13. H
- 14. E
- 15. K
- 16. C
- 17. B
- 18. G
- 19. F
- 20. D





Answers

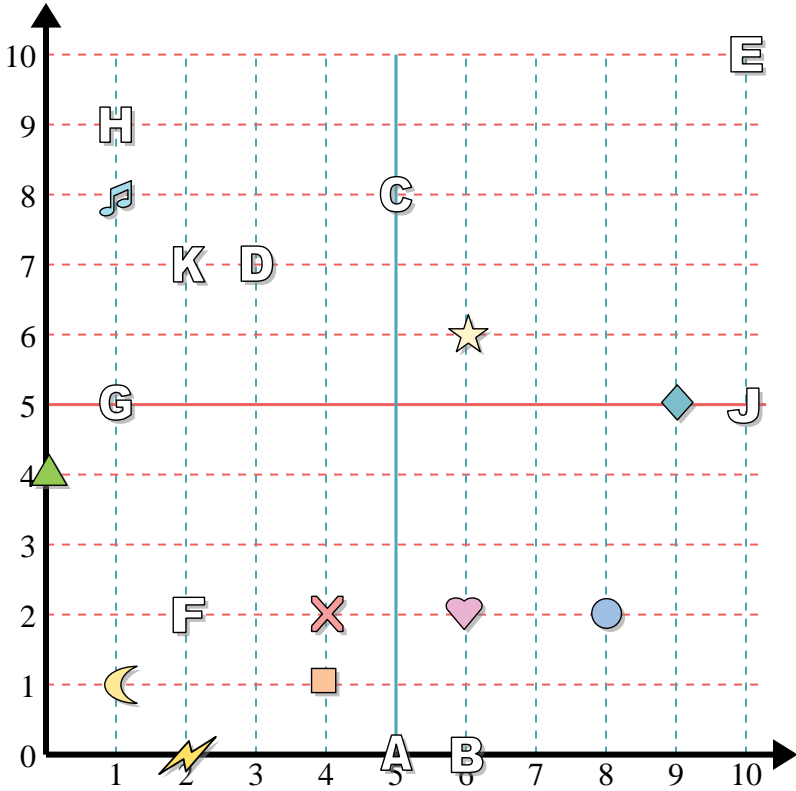
1. \_\_\_\_\_
2. \_\_\_\_\_
3. \_\_\_\_\_
4. \_\_\_\_\_
5. \_\_\_\_\_
6. \_\_\_\_\_
7. \_\_\_\_\_
8. \_\_\_\_\_
9. \_\_\_\_\_
10. \_\_\_\_\_
11. \_\_\_\_\_
12. \_\_\_\_\_
13. \_\_\_\_\_
14. \_\_\_\_\_
15. \_\_\_\_\_
16. \_\_\_\_\_
17. \_\_\_\_\_
18. \_\_\_\_\_
19. \_\_\_\_\_
20. \_\_\_\_\_

Determine the coordinates of each figure.

- |               |              |
|---------------|--------------|
| 1) cross      | 2) square    |
| 3) music note | 4) moon      |
| 5) circle     | 6) heart     |
| 7) triangle   | 8) lightning |
| 9) diamond    | 10) star     |

Determine which letter is at each coordinate.

- |             |               |
|-------------|---------------|
| 11) (6 , 0) | 12) (10 , 5)  |
| 13) (5 , 8) | 14) (1 , 5)   |
| 15) (1 , 9) | 16) (10 , 10) |
| 17) (5 , 0) | 18) (3 , 7)   |
| 19) (2 , 2) | 20) (2 , 7)   |



Determine the coordinates of each figure.

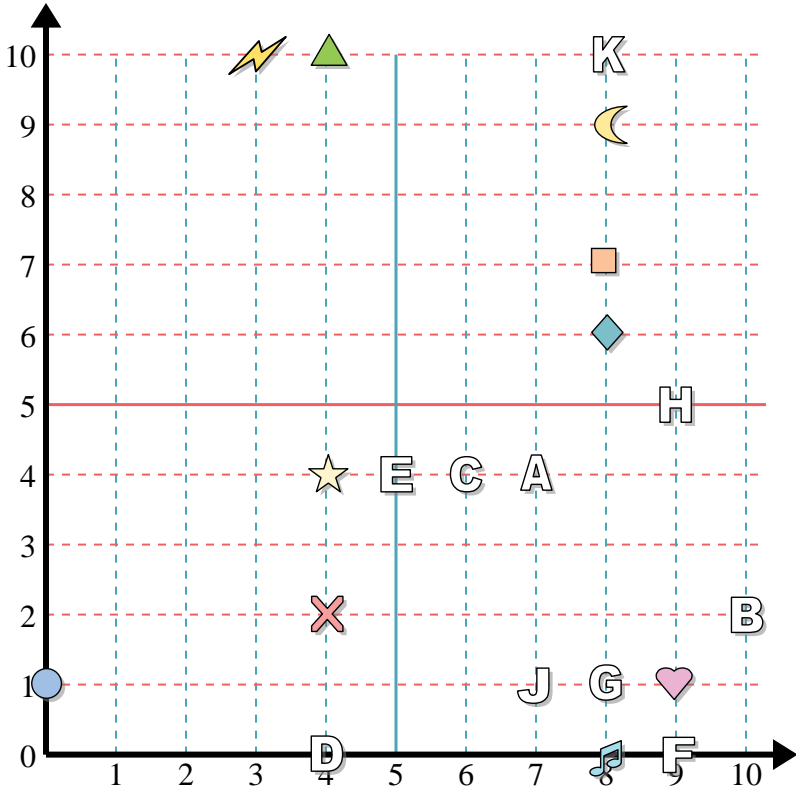
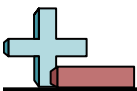
- 1) cross
- 2) square
- 3) music note
- 4) moon
- 5) circle
- 6) heart
- 7) triangle
- 8) lightning
- 9) diamond
- 10) star

Determine which letter is at each coordinate.

- 11) (6, 0)
- 12) (10, 5)
- 13) (5, 8)
- 14) (1, 5)
- 15) (1, 9)
- 16) (10, 10)
- 17) (5, 0)
- 18) (3, 7)
- 19) (2, 2)
- 20) (2, 7)

Answers

- 1. (4, 2)
- 2. (4, 1)
- 3. (1, 8)
- 4. (1, 1)
- 5. (8, 2)
- 6. (6, 2)
- 7. (0, 4)
- 8. (2, 0)
- 9. (9, 5)
- 10. (6, 6)
- 11. B
- 12. J
- 13. C
- 14. G
- 15. H
- 16. E
- 17. A
- 18. D
- 19. F
- 20. K



**Answers**

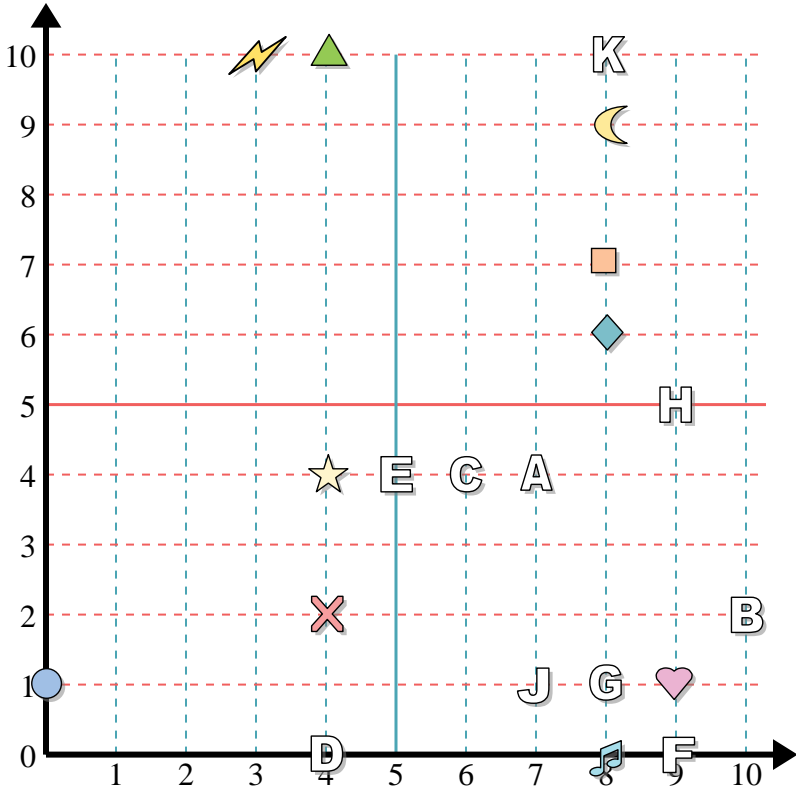
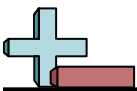
1. \_\_\_\_\_
2. \_\_\_\_\_
3. \_\_\_\_\_
4. \_\_\_\_\_
5. \_\_\_\_\_
6. \_\_\_\_\_
7. \_\_\_\_\_
8. \_\_\_\_\_
9. \_\_\_\_\_
10. \_\_\_\_\_
11. \_\_\_\_\_
12. \_\_\_\_\_
13. \_\_\_\_\_
14. \_\_\_\_\_
15. \_\_\_\_\_
16. \_\_\_\_\_
17. \_\_\_\_\_
18. \_\_\_\_\_
19. \_\_\_\_\_
20. \_\_\_\_\_

**Determine the coordinates of each figure.**

- |              |               |
|--------------|---------------|
| 1) star      | 2) moon       |
| 3) heart     | 4) diamond    |
| 5) lightning | 6) triangle   |
| 7) circle    | 8) music note |
| 9) square    | 10) cross     |

**Determine which letter is at each coordinate.**

- |             |             |
|-------------|-------------|
| 11) (9, 5)  | 12) (8, 10) |
| 13) (8, 1)  | 14) (9, 0)  |
| 15) (7, 4)  | 16) (6, 4)  |
| 17) (4, 0)  | 18) (7, 1)  |
| 19) (10, 2) | 20) (5, 4)  |



Determine the coordinates of each figure.

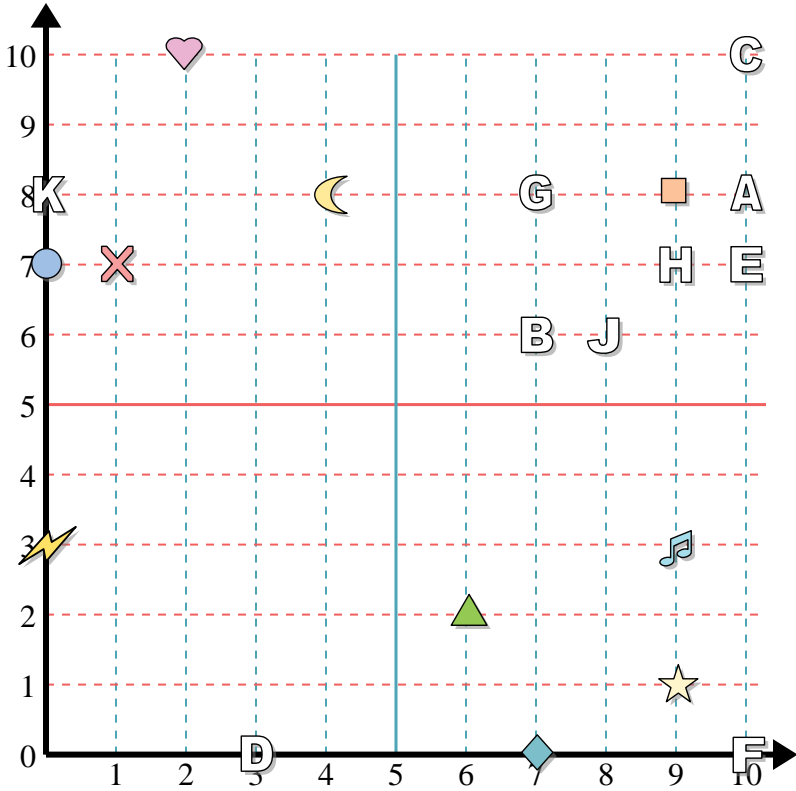
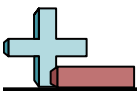
- 1) star
- 2) moon
- 3) heart
- 4) diamond
- 5) lightning
- 6) triangle
- 7) circle
- 8) music note
- 9) square
- 10) cross

Determine which letter is at each coordinate.

- 11) (9, 5)
- 12) (8, 10)
- 13) (8, 1)
- 14) (9, 0)
- 15) (7, 4)
- 16) (6, 4)
- 17) (4, 0)
- 18) (7, 1)
- 19) (10, 2)
- 20) (5, 4)

Answers

- 1. (4, 4)
- 2. (8, 9)
- 3. (9, 1)
- 4. (8, 6)
- 5. (3, 10)
- 6. (4, 10)
- 7. (0, 1)
- 8. (8, 0)
- 9. (8, 7)
- 10. (4, 2)
- 11. H
- 12. K
- 13. G
- 14. F
- 15. A
- 16. C
- 17. D
- 18. J
- 19. B
- 20. E



**Answers**

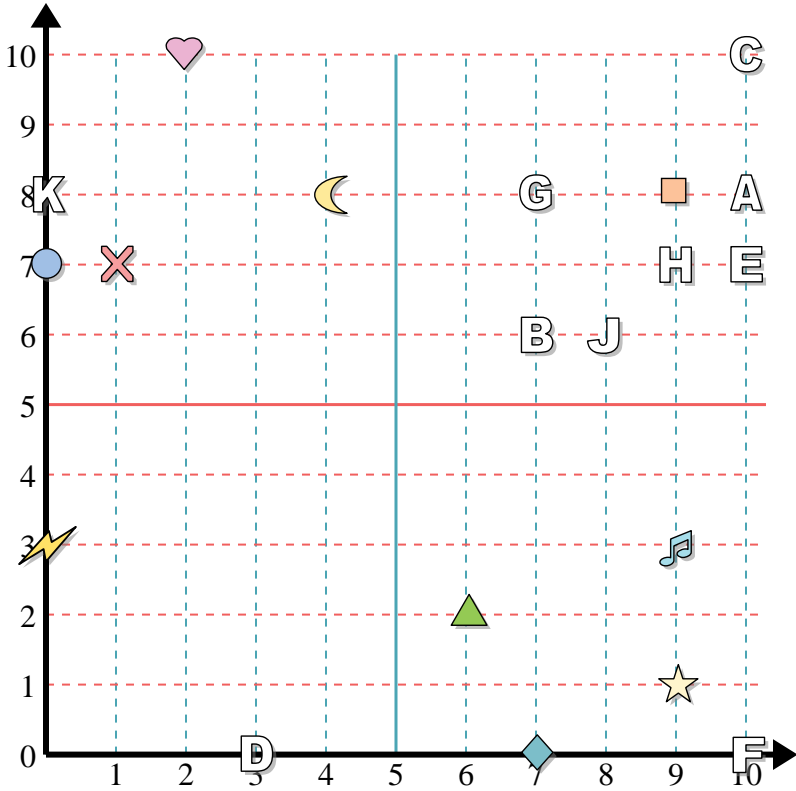
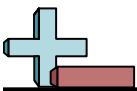
1. \_\_\_\_\_
2. \_\_\_\_\_
3. \_\_\_\_\_
4. \_\_\_\_\_
5. \_\_\_\_\_
6. \_\_\_\_\_
7. \_\_\_\_\_
8. \_\_\_\_\_
9. \_\_\_\_\_
10. \_\_\_\_\_
11. \_\_\_\_\_
12. \_\_\_\_\_
13. \_\_\_\_\_
14. \_\_\_\_\_
15. \_\_\_\_\_
16. \_\_\_\_\_
17. \_\_\_\_\_
18. \_\_\_\_\_
19. \_\_\_\_\_
20. \_\_\_\_\_

**Determine the coordinates of each figure.**

- |               |              |
|---------------|--------------|
| 1) diamond    | 2) star      |
| 3) triangle   | 4) moon      |
| 5) music note | 6) lightning |
| 7) square     | 8) heart     |
| 9) circle     | 10) cross    |

**Determine which letter is at each coordinate.**

- |               |              |
|---------------|--------------|
| 11) (10 , 8)  | 12) (10 , 0) |
| 13) (9 , 7)   | 14) (10 , 7) |
| 15) (8 , 6)   | 16) (7 , 8)  |
| 17) (0 , 8)   | 18) (7 , 6)  |
| 19) (10 , 10) | 20) (3 , 0)  |



Determine the coordinates of each figure.

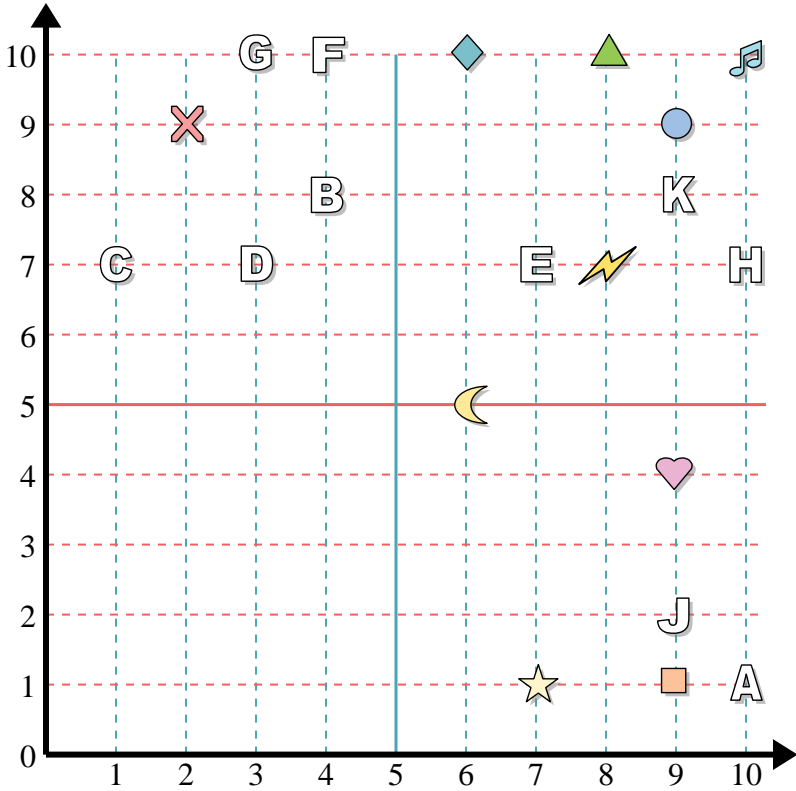
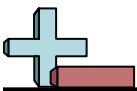
- 1) diamond
- 2) star
- 3) triangle
- 4) moon
- 5) music note
- 6) lightning
- 7) square
- 8) heart
- 9) circle
- 10) cross

Determine which letter is at each coordinate.

- 11) (10, 8)
- 12) (10, 0)
- 13) (9, 7)
- 14) (10, 7)
- 15) (8, 6)
- 16) (7, 8)
- 17) (0, 8)
- 18) (7, 6)
- 19) (10, 10)
- 20) (3, 0)

Answers

- 1. (7, 0)
- 2. (9, 1)
- 3. (6, 2)
- 4. (4, 8)
- 5. (9, 3)
- 6. (0, 3)
- 7. (9, 8)
- 8. (2, 10)
- 9. (0, 7)
- 10. (1, 7)
- 11. A
- 12. F
- 13. H
- 14. E
- 15. J
- 16. G
- 17. K
- 18. B
- 19. C
- 20. D



**Answers**

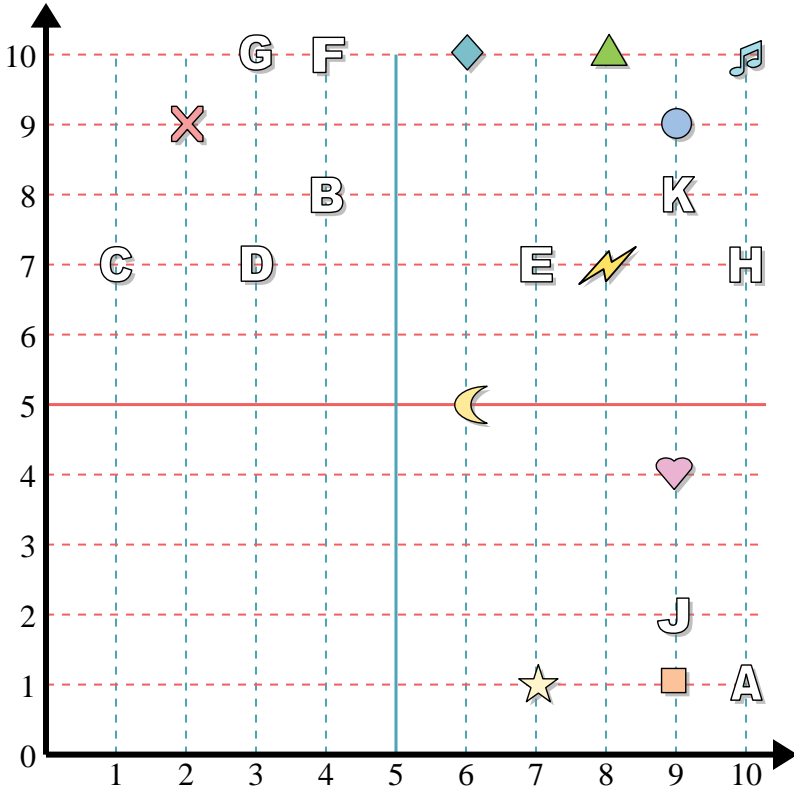
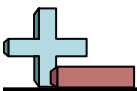
1. \_\_\_\_\_
2. \_\_\_\_\_
3. \_\_\_\_\_
4. \_\_\_\_\_
5. \_\_\_\_\_
6. \_\_\_\_\_
7. \_\_\_\_\_
8. \_\_\_\_\_
9. \_\_\_\_\_
10. \_\_\_\_\_
11. \_\_\_\_\_
12. \_\_\_\_\_
13. \_\_\_\_\_
14. \_\_\_\_\_
15. \_\_\_\_\_
16. \_\_\_\_\_
17. \_\_\_\_\_
18. \_\_\_\_\_
19. \_\_\_\_\_
20. \_\_\_\_\_

**Determine the coordinates of each figure.**

- |               |             |
|---------------|-------------|
| 1) star       | 2) cross    |
| 3) music note | 4) square   |
| 5) lightning  | 6) moon     |
| 7) circle     | 8) heart    |
| 9) triangle   | 10) diamond |

**Determine which letter is at each coordinate.**

- |             |             |
|-------------|-------------|
| 11) (10, 1) | 12) (4, 10) |
| 13) (9, 8)  | 14) (10, 7) |
| 15) (9, 2)  | 16) (3, 7)  |
| 17) (1, 7)  | 18) (4, 8)  |
| 19) (7, 7)  | 20) (3, 10) |



Determine the coordinates of each figure.

- 1) star
- 2) cross
- 3) music note
- 4) square
- 5) lightning
- 6) moon
- 7) circle
- 8) heart
- 9) triangle
- 10) diamond

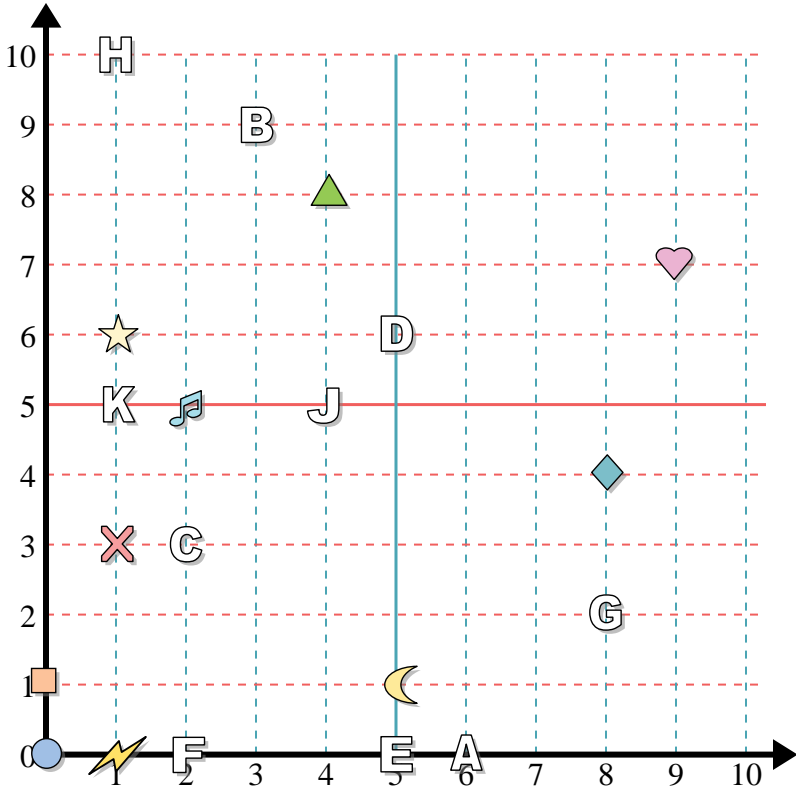
Determine which letter is at each coordinate.

- 11) (10, 1)
- 12) (4, 10)
- 13) (9, 8)
- 14) (10, 7)
- 15) (9, 2)
- 16) (3, 7)
- 17) (1, 7)
- 18) (4, 8)
- 19) (7, 7)
- 20) (3, 10)

Answers

- 1. (7, 1)
- 2. (2, 9)
- 3. (10, 10)
- 4. (9, 1)
- 5. (8, 7)
- 6. (6, 5)
- 7. (9, 9)
- 8. (9, 4)
- 9. (8, 10)
- 10. (6, 10)
- 11. A
- 12. F
- 13. K
- 14. H
- 15. J
- 16. D
- 17. C
- 18. B
- 19. E
- 20. G





Answers

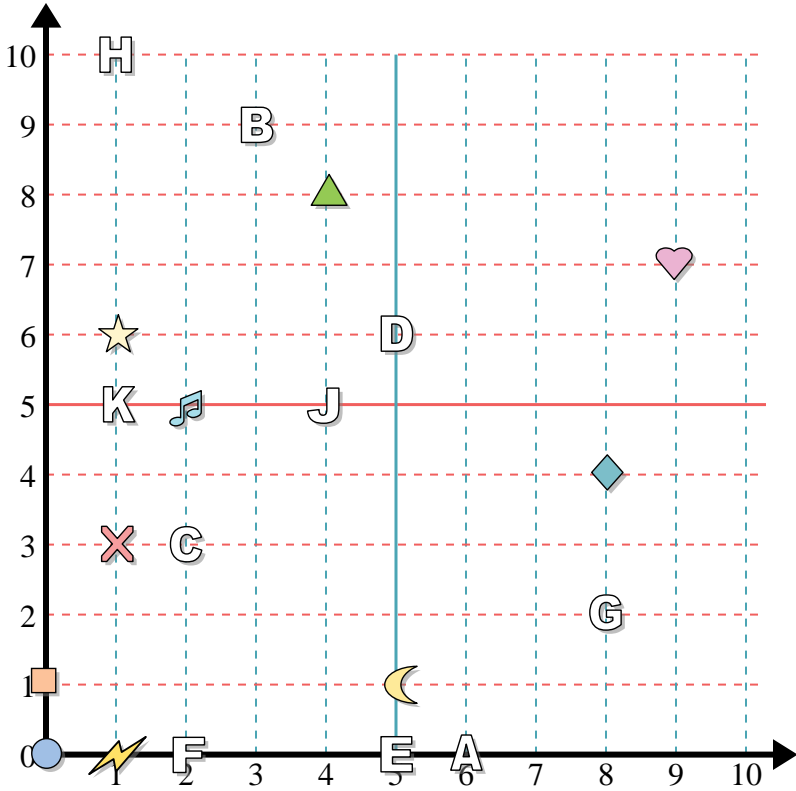
1. \_\_\_\_\_
2. \_\_\_\_\_
3. \_\_\_\_\_
4. \_\_\_\_\_
5. \_\_\_\_\_
6. \_\_\_\_\_
7. \_\_\_\_\_
8. \_\_\_\_\_
9. \_\_\_\_\_
10. \_\_\_\_\_
11. \_\_\_\_\_
12. \_\_\_\_\_
13. \_\_\_\_\_
14. \_\_\_\_\_
15. \_\_\_\_\_
16. \_\_\_\_\_
17. \_\_\_\_\_
18. \_\_\_\_\_
19. \_\_\_\_\_
20. \_\_\_\_\_

Determine the coordinates of each figure.

- |               |             |
|---------------|-------------|
| 1) music note | 2) triangle |
| 3) cross      | 4) heart    |
| 5) lightning  | 6) square   |
| 7) circle     | 8) diamond  |
| 9) moon       | 10) star    |

Determine which letter is at each coordinate.

- |             |              |
|-------------|--------------|
| 11) (8 , 2) | 12) (1 , 5)  |
| 13) (4 , 5) | 14) (5 , 0)  |
| 15) (5 , 6) | 16) (6 , 0)  |
| 17) (3 , 9) | 18) (2 , 3)  |
| 19) (2 , 0) | 20) (1 , 10) |



Determine the coordinates of each figure.

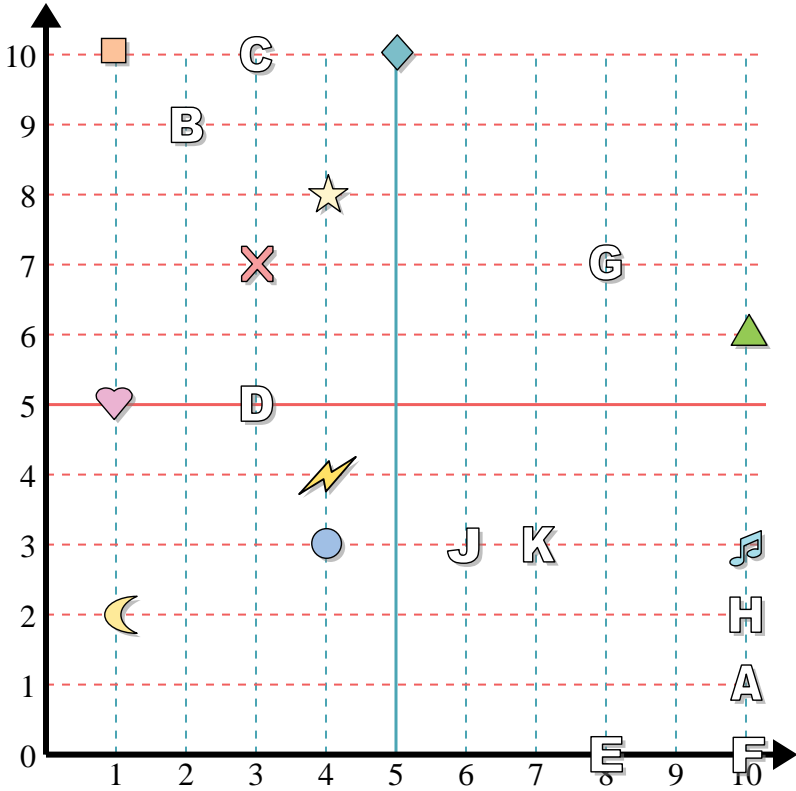
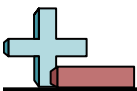
- 1) music note
- 2) triangle
- 3) cross
- 4) heart
- 5) lightning
- 6) square
- 7) circle
- 8) diamond
- 9) moon
- 10) star

Determine which letter is at each coordinate.

- 11) (8, 2)
- 12) (1, 5)
- 13) (4, 5)
- 14) (5, 0)
- 15) (5, 6)
- 16) (6, 0)
- 17) (3, 9)
- 18) (2, 3)
- 19) (2, 0)
- 20) (1, 10)

Answers

- 1. (2, 5)
- 2. (4, 8)
- 3. (1, 3)
- 4. (9, 7)
- 5. (1, 0)
- 6. (0, 1)
- 7. (0, 0)
- 8. (8, 4)
- 9. (5, 1)
- 10. (1, 6)
- 11. G
- 12. K
- 13. J
- 14. E
- 15. D
- 16. A
- 17. B
- 18. C
- 19. F
- 20. H



Answers

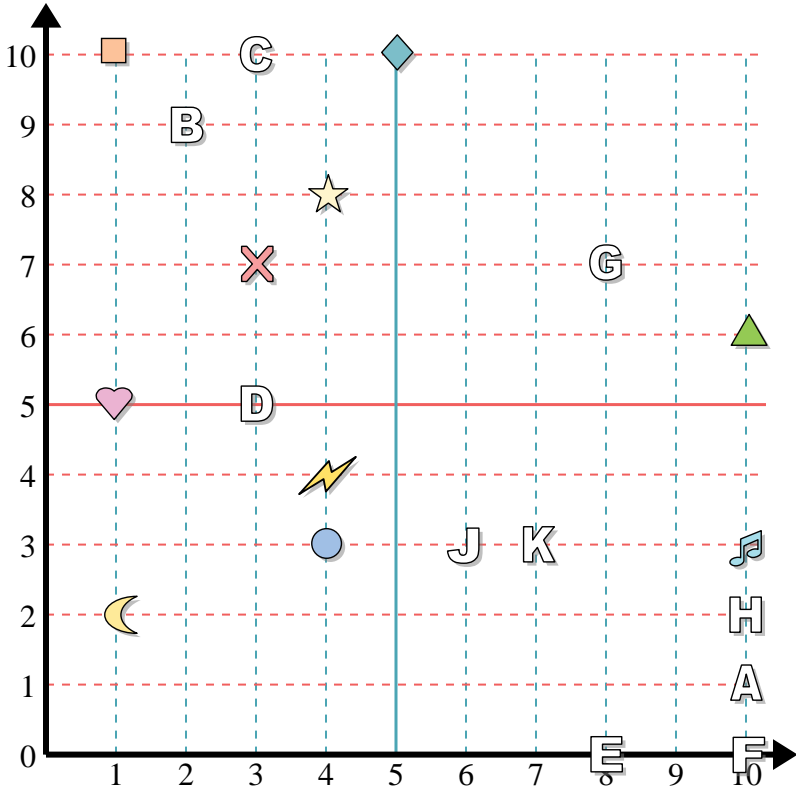
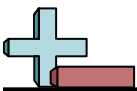
1. \_\_\_\_\_
2. \_\_\_\_\_
3. \_\_\_\_\_
4. \_\_\_\_\_
5. \_\_\_\_\_
6. \_\_\_\_\_
7. \_\_\_\_\_
8. \_\_\_\_\_
9. \_\_\_\_\_
10. \_\_\_\_\_
11. \_\_\_\_\_
12. \_\_\_\_\_
13. \_\_\_\_\_
14. \_\_\_\_\_
15. \_\_\_\_\_
16. \_\_\_\_\_
17. \_\_\_\_\_
18. \_\_\_\_\_
19. \_\_\_\_\_
20. \_\_\_\_\_

Determine the coordinates of each figure.

- |             |               |
|-------------|---------------|
| 1) moon     | 2) music note |
| 3) triangle | 4) square     |
| 5) circle   | 6) cross      |
| 7) heart    | 8) diamond    |
| 9) star     | 10) lightning |

Determine which letter is at each coordinate.

- |             |             |
|-------------|-------------|
| 11) (2, 9)  | 12) (3, 5)  |
| 13) (8, 0)  | 14) (6, 3)  |
| 15) (8, 7)  | 16) (10, 2) |
| 17) (10, 0) | 18) (7, 3)  |
| 19) (10, 1) | 20) (3, 10) |



Determine the coordinates of each figure.

- 1) moon
- 2) music note
- 3) triangle
- 4) square
- 5) circle
- 6) cross
- 7) heart
- 8) diamond
- 9) star
- 10) lightning

Determine which letter is at each coordinate.

- 11) (2, 9)
- 12) (3, 5)
- 13) (8, 0)
- 14) (6, 3)
- 15) (8, 7)
- 16) (10, 2)
- 17) (10, 0)
- 18) (7, 3)
- 19) (10, 1)
- 20) (3, 10)

Answers

- 1. (1, 2)
- 2. (10, 3)
- 3. (10, 6)
- 4. (1, 10)
- 5. (4, 3)
- 6. (3, 7)
- 7. (1, 5)
- 8. (5, 10)
- 9. (4, 8)
- 10. (4, 4)
- 11. B
- 12. D
- 13. E
- 14. J
- 15. G
- 16. H
- 17. F
- 18. K
- 19. A
- 20. C